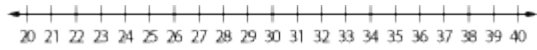


1. Round to the nearest ten. Estimate the sum.

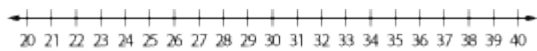
$$39 + 33$$



- A. 60 B. 50
- C. 80 D. 70
-

2. Round to the nearest ten. Estimate the sum.

$$24 + 22$$



- A. 50 B. 60
- C. 40 D. 70
-

3. Find the sum.

$$9 + 4$$

- A. 14 B. 11
- C. 13 D. 12
-

4. Sam has 3 red pencils. Lu has 4 purple pencils. Mari has 2 blue pencils. How many pencils do they have altogether?

- A. 7 B. 10
- C. 8 D. 9

5. Find the sum.

$$2 \text{ tens} + 6 \text{ tens} = \underline{\quad} \text{ tens}$$

A. 6

B. 7

C. 9

D. 8

6. Find the sum.

$$60 + 10 = \underline{\quad}$$

A. 80

B. 90

C. 70

D. 50

7. Find $2 + 54$.

A. 55

B. 54

C. 56

D. 57

8. Find $81 + 8$.

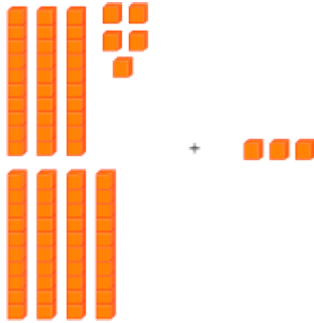
A. 87

B. 88

C. 86

D. 89

9. Find $75 + 3$.



A. 76

B. 79

C. 77

D. 78

10. Find $31 + 7$.



A. 36

B. 35

C. 38

D. 37

11. Find the sum.

$$49 + 4$$

A. 52

B. 53

C. 54

D. 55

12. Find the sum.

$$28 + 6$$

A. 34

B. 33

C. 35

D. 36

13. Find the sum.

$$33 + 29$$

A. 64

B. 52

C. 62

D. 54

14. Find the sum.

$$39 + 25$$

A. 53

B. 54

C. 64

D. 63

15. Find the sum.

$$16 + 26 + 51$$

A. 90

B. 92

C. 83

D. 93

16. Find the sum.

$$27 + 32 + 33$$

A. 89

B. 92

C. 95

D. 82
