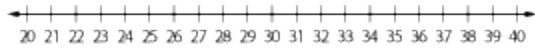


1. Round to the nearest ten. Estimate the sum.

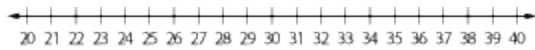
$$32 + 26$$



- |                          |                          |
|--------------------------|--------------------------|
| <input type="radio"/> 50 | <input type="radio"/> 60 |
| A.                       | B.                       |
| <input type="radio"/> 40 | <input type="radio"/> 70 |
| C.                       | D.                       |
- 

2. Round to the nearest ten. Estimate the sum.

$$24 + 35$$



- |                          |                          |
|--------------------------|--------------------------|
| <input type="radio"/> 50 | <input type="radio"/> 60 |
| A.                       | B.                       |
| <input type="radio"/> 70 | <input type="radio"/> 40 |
| C.                       | D.                       |
- 

3. Find the sum.

$$9 + 4$$

- |                          |                          |
|--------------------------|--------------------------|
| <input type="radio"/> 12 | <input type="radio"/> 13 |
| A.                       | B.                       |
| <input type="radio"/> 11 | <input type="radio"/> 14 |
| C.                       | D.                       |
-

4. Find the sum.

$$40 + 10$$

70

A.

60

C.

40

B.

50

D.

---

5. Find the sum.

$$40 + 40 = \underline{\quad}$$

80

A.

90

C.

60

B.

70

D.

---

6. Find the sum.

$$70 + 20 = \underline{\quad}$$

90

A.

50

C.

80

B.

100

D.

---

7. Find  $59 + 2$ .

61

A.

60

C.

62

B.

63

D.

---

8. Find  $81 + 8$ .

88

A.

89

C.

87

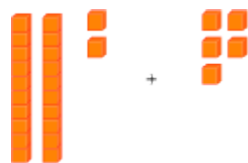
B.

86

D.

---

9. Find  $22 + 5$ .



29

A.

28

C.

27

B.

26

D.

---

10. Find  $12 + 9$ .



19

A.

20

C.

22

B.

21

D.

---

11. Find the sum.

$$17 + 5$$

22

A.

20

C.

19

B.

23

D.

---

12. Find the sum.

$$18 + 7$$

26

A.

24

C.

25

B.

23

D.

---

13. Find the sum.

$$41 + 42$$

84

A.

83

C.

85

B.

86

D.

---

14. Find the sum.

$$23 + 75$$

94

A.

98

C.

101

B.

99

D.

---

15. Find the sum.

$$16 + 26 + 51$$

90

A.

83

C.

92

B.

93

D.

---

16. Find the sum.

$$41 + 9 + 27$$

67

A.

77

C.

70

B.

76

D.

---