
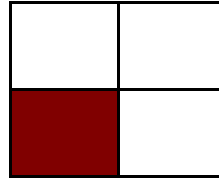


Modeling Fourths (A)


Instructions: Write the correct numerator.




$$\frac{1}{4}$$




$$\frac{1}{4}$$




$$\frac{4}{4}$$



$$\frac{2}{4}$$




$$\frac{4}{4}$$




$$\frac{2}{4}$$




$$\frac{2}{4}$$




$$\frac{4}{4}$$



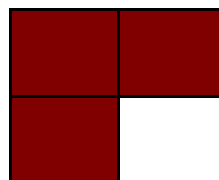
$$\frac{2}{4}$$



$$\frac{2}{4}$$



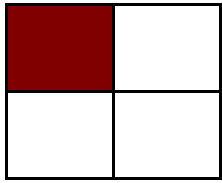
$$\frac{4}{4}$$



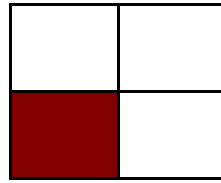
$$\frac{3}{4}$$

Modeling Fourths (A) Answers


Instructions: Write the correct numerator.




$$\frac{1}{4}$$




$$\frac{1}{4}$$



$$\frac{4}{4}$$



$$\frac{3}{4}$$



$$\frac{4}{4}$$



$$\frac{2}{4}$$




$$\frac{2}{4}$$




$$\frac{4}{4}$$



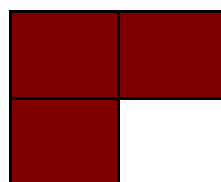
$$\frac{2}{4}$$



$$\frac{2}{4}$$




$$\frac{4}{4}$$



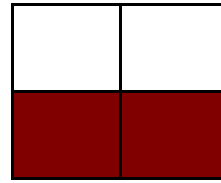
$$\frac{3}{4}$$

Modeling Fourths (B)

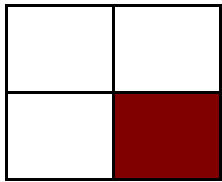
Instructions: Write the correct numerator.




$$\frac{4}{4}$$




$$\frac{2}{4}$$



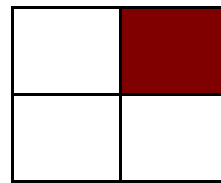
$$\frac{1}{4}$$



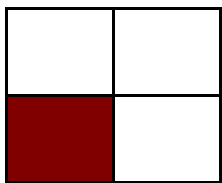
$$\frac{2}{4}$$



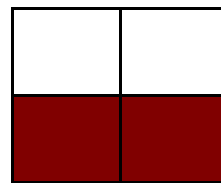
$$\frac{3}{4}$$




$$\frac{1}{4}$$




$$\frac{1}{4}$$




$$\frac{2}{4}$$




$$\frac{4}{4}$$



$$\frac{4}{4}$$




$$\frac{2}{4}$$



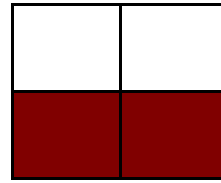
$$\frac{1}{4}$$

Modeling Fourths (B) Answers

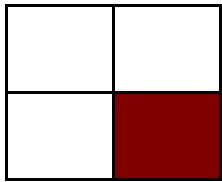
Instructions: Write the correct numerator.




$$\frac{4}{4}$$




$$\frac{2}{4}$$



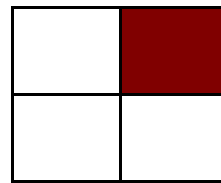
$$\frac{1}{4}$$



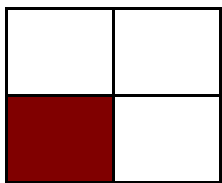
$$\frac{3}{4}$$



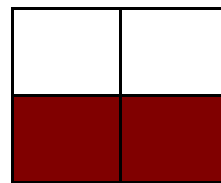
$$\frac{3}{4}$$




$$\frac{1}{4}$$



$$\frac{1}{4}$$




$$\frac{2}{4}$$




$$\frac{4}{4}$$



$$\frac{4}{4}$$




$$\frac{2}{4}$$




$$\frac{1}{4}$$

Modeling Fourths (C)


Instructions: Write the correct numerator.




$$\frac{4}{4}$$




$$\frac{3}{4}$$



$$\frac{2}{4}$$



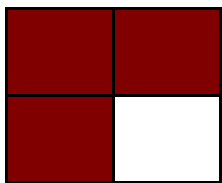
$$\frac{3}{4}$$



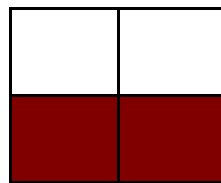
$$\frac{4}{4}$$



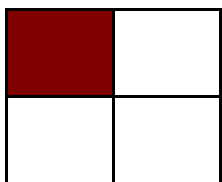
$$\frac{4}{4}$$




$$\frac{3}{4}$$




$$\frac{2}{4}$$




$$\frac{1}{4}$$



$$\frac{2}{4}$$




$$\frac{2}{4}$$




$$\frac{4}{4}$$

Modeling Fourths (C) Answers


Instructions: Write the correct numerator.




$$\frac{4}{4}$$




$$\frac{3}{4}$$



$$\frac{2}{4}$$




$$\frac{3}{4}$$



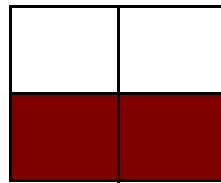
$$\frac{4}{4}$$



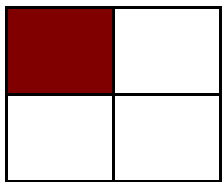
$$\frac{4}{4}$$



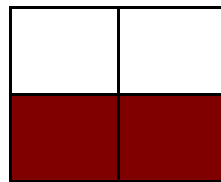
$$\frac{3}{4}$$



$$\frac{2}{4}$$



$$\frac{1}{4}$$



$$\frac{2}{4}$$




$$\frac{2}{4}$$



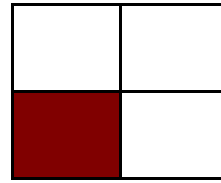
$$\frac{4}{4}$$

Modeling Fourths (D)

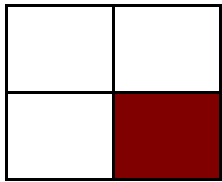
Instructions: Write the correct numerator.



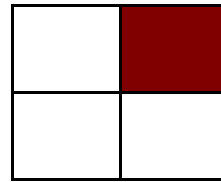
$$\frac{4}{4}$$



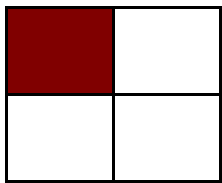
$$\frac{1}{4}$$



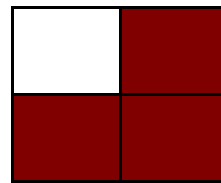
$$\frac{1}{4}$$



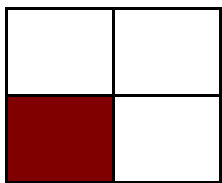
$$\frac{1}{4}$$



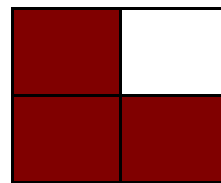
$$\frac{1}{4}$$




$$\frac{2}{4}$$




$$\frac{1}{4}$$



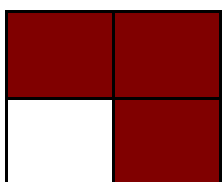
$$\frac{3}{4}$$




$$\frac{4}{4}$$



$$\frac{2}{4}$$




$$\frac{3}{4}$$



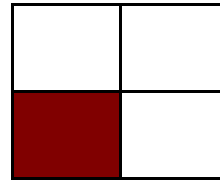
$$\frac{1}{4}$$

Modeling Fourths (D) Answers

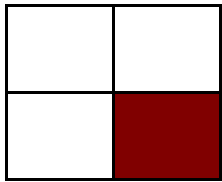
Instructions: Write the correct numerator.



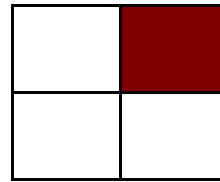
$$\frac{4}{4}$$



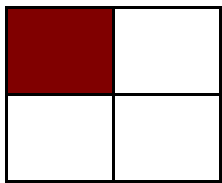
$$\frac{1}{4}$$




$$\frac{1}{4}$$



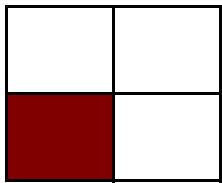
$$\frac{1}{4}$$




$$\frac{1}{4}$$




$$\frac{3}{4}$$



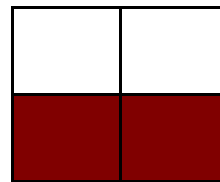
$$\frac{1}{4}$$




$$\frac{3}{4}$$




$$\frac{4}{4}$$



$$\frac{2}{4}$$



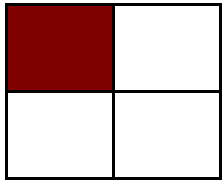
$$\frac{3}{4}$$




$$\frac{1}{4}$$

Modeling Fourths (E)

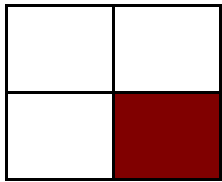
Instructions: Write the correct numerator.



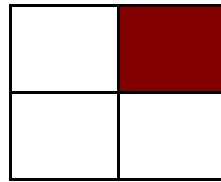
$$\frac{1}{4}$$



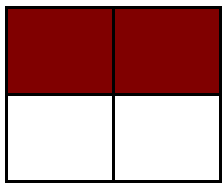
$$\frac{4}{4}$$




$$\frac{1}{4}$$



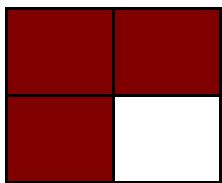
$$\frac{1}{4}$$




$$\frac{2}{4}$$



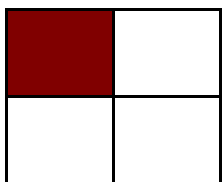
$$\frac{2}{4}$$




$$\frac{3}{4}$$




$$\frac{1}{4}$$



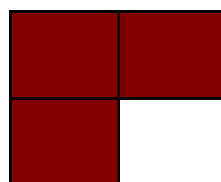
$$\frac{1}{4}$$



$$\frac{2}{4}$$



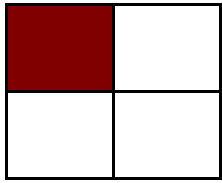
$$\frac{1}{4}$$




$$\frac{3}{4}$$

Modeling Fourths (E) Answers

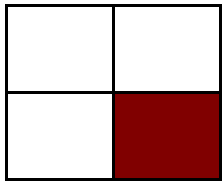
Instructions: Write the correct numerator.



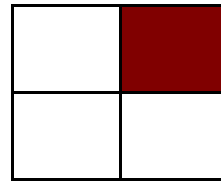
$$\frac{1}{4}$$



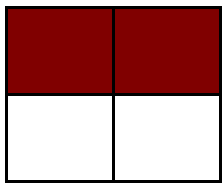
$$\frac{3}{4}$$



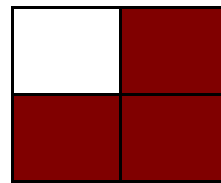
$$\frac{1}{4}$$



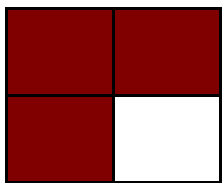
$$\frac{1}{4}$$



$$\frac{2}{4}$$



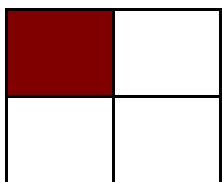
$$\frac{3}{4}$$




$$\frac{3}{4}$$




$$\frac{1}{4}$$



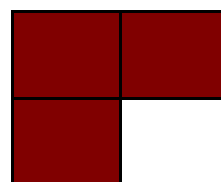
$$\frac{1}{4}$$



$$\frac{2}{4}$$



$$\frac{1}{4}$$



$$\frac{3}{4}$$