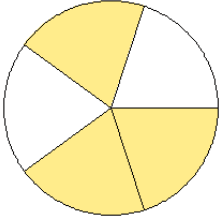


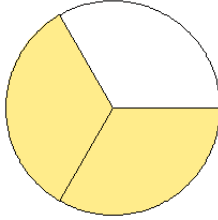
# Fraction Models (A)

What fraction is shown in each model?

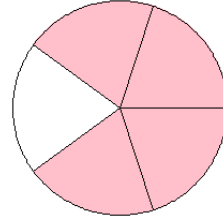
1.



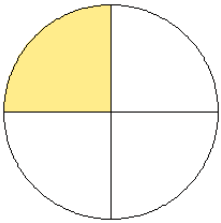
2.



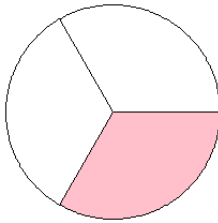
3.



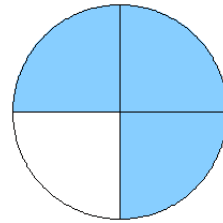
4.



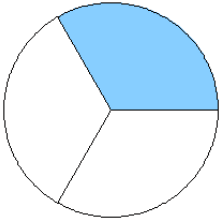
5.



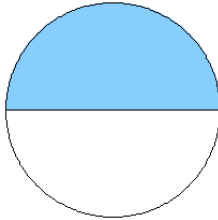
6.



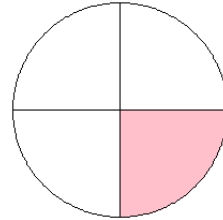
7.



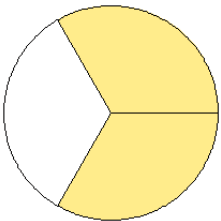
8.



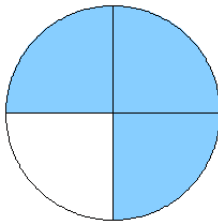
9.



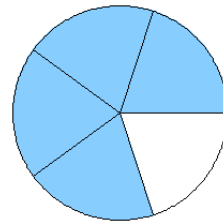
10.



11.



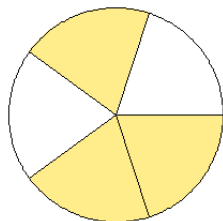
12.



# Fraction Models (A) Answers

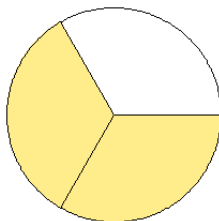
What fraction is shown in each model?

1.



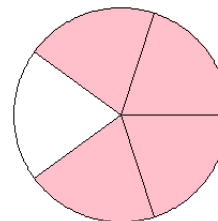
$$= \frac{3}{5}$$

2.



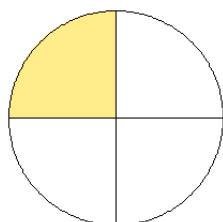
$$= \frac{2}{3}$$

3.



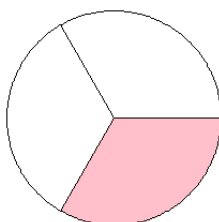
$$= \frac{4}{5}$$

4.



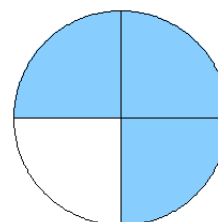
$$= \frac{1}{4}$$

5.



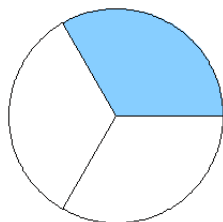
$$= \frac{1}{3}$$

6.



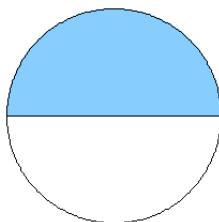
$$= \frac{3}{4}$$

7.



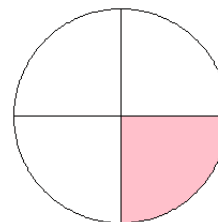
$$= \frac{1}{3}$$

8.



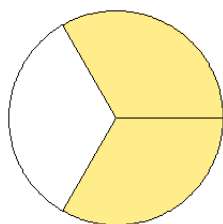
$$= \frac{1}{2}$$

9.



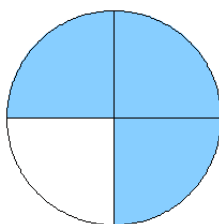
$$= \frac{1}{4}$$

10.



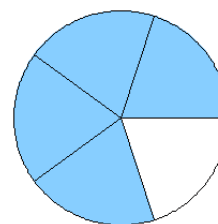
$$= \frac{2}{3}$$

11.



$$= \frac{3}{4}$$

12.

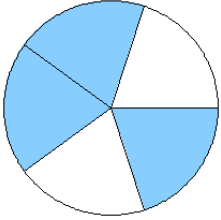


$$= \frac{4}{5}$$

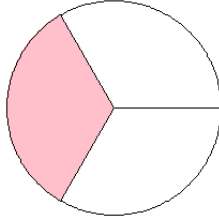
## Fraction Models (B)

What fraction is shown in each model?

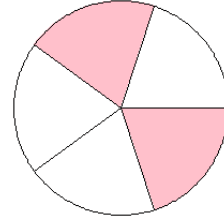
1.



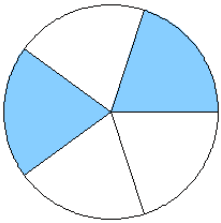
2.



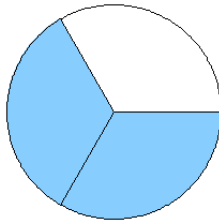
3.



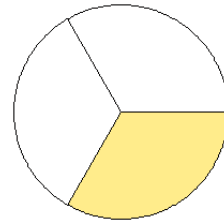
4.



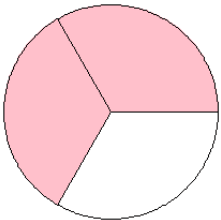
5.



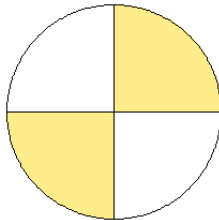
6.



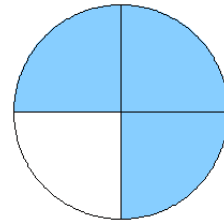
7.



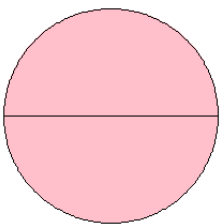
8.



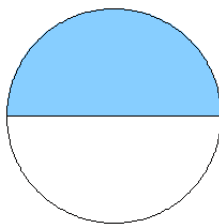
9.



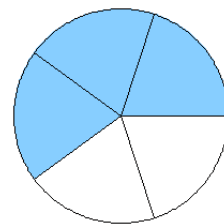
10.



11.



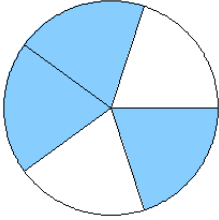
12.



## Fraction Models (B) Answers

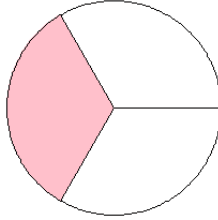
What fraction is shown in each model?

1.



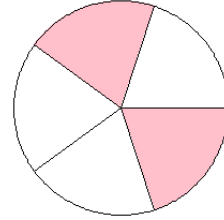
$$= \frac{3}{5}$$

2.



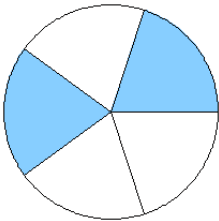
$$= \frac{1}{3}$$

3.



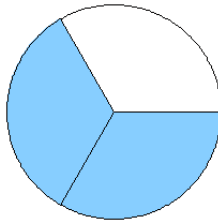
$$= \frac{2}{5}$$

4.



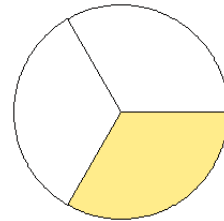
$$= \frac{2}{5}$$

5.



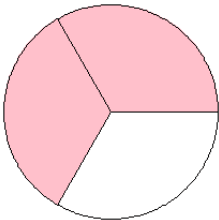
$$= \frac{2}{3}$$

6.



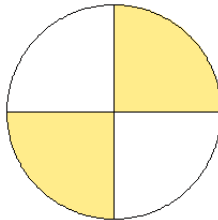
$$= \frac{1}{3}$$

7.



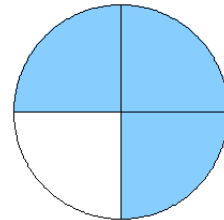
$$= \frac{2}{3}$$

8.



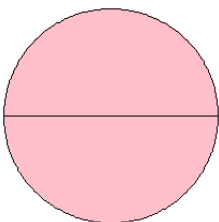
$$= \frac{2}{4}$$

9.



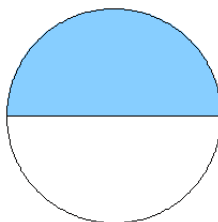
$$= \frac{3}{4}$$

10.



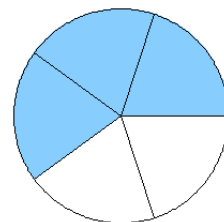
$$= \frac{2}{2}$$

11.



$$= \frac{1}{2}$$

12.

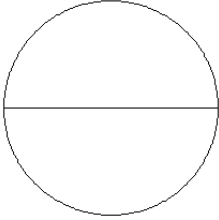


$$= \frac{3}{5}$$

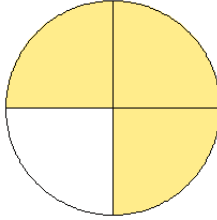
# Fraction Models (C)

What fraction is shown in each model?

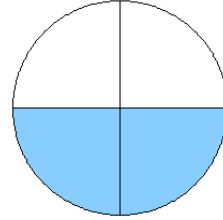
1.



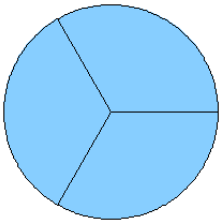
2.



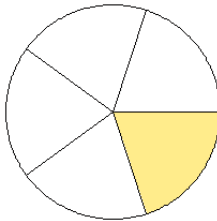
3.



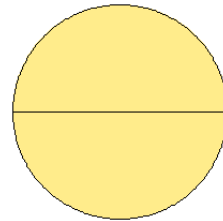
4.



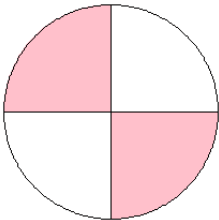
5.



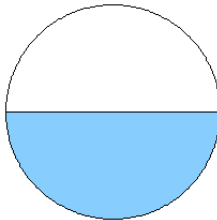
6.



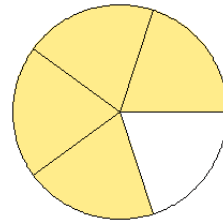
7.



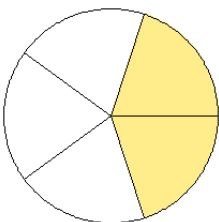
8.



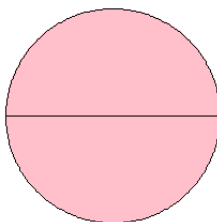
9.



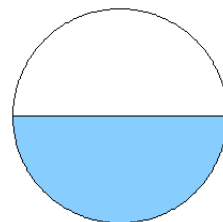
10.



11.



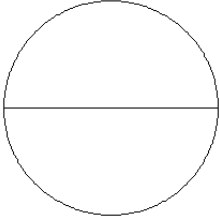
12.



# Fraction Models (C) Answers

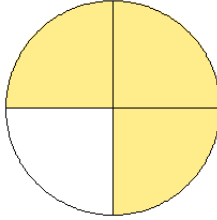
What fraction is shown in each model?

1.



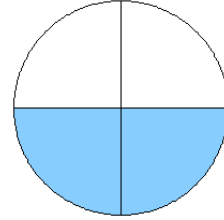
$$= \frac{0}{2}$$

2.



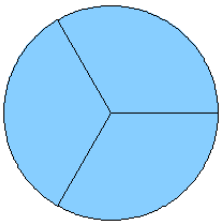
$$= \frac{3}{4}$$

3.



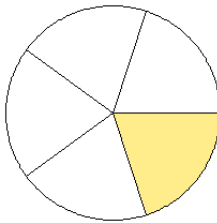
$$= \frac{2}{4}$$

4.



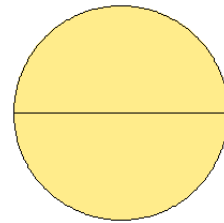
$$= \frac{3}{3}$$

5.



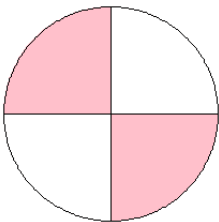
$$= \frac{1}{5}$$

6.



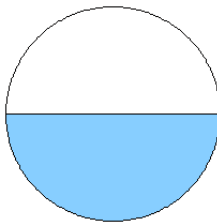
$$= \frac{2}{2}$$

7.



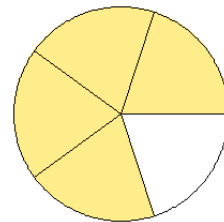
$$= \frac{2}{4}$$

8.



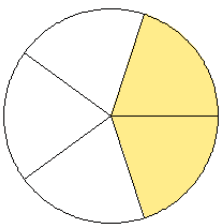
$$= \frac{1}{2}$$

9.



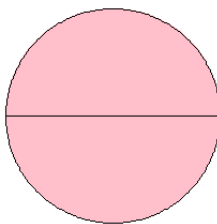
$$= \frac{4}{5}$$

10.



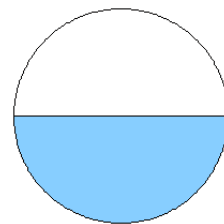
$$= \frac{2}{5}$$

11.



$$= \frac{2}{2}$$

12.

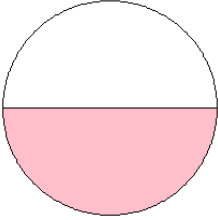


$$= \frac{1}{2}$$

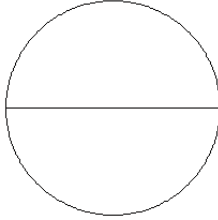
## Fraction Models (D)

What fraction is shown in each model?

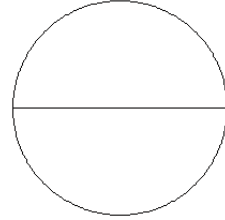
1.



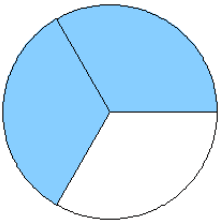
2.



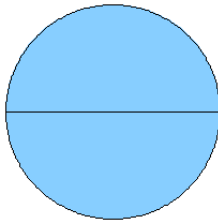
3.



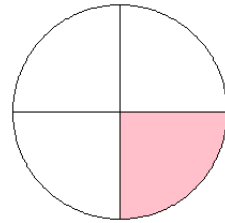
4.



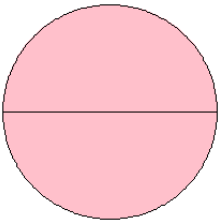
5.



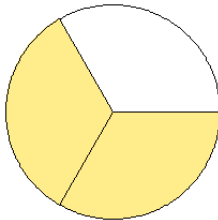
6.




7.



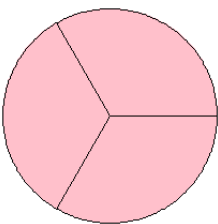
8.



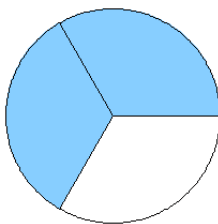
9.



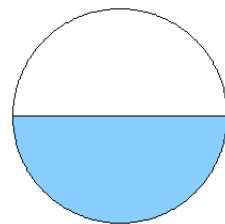
10.



11.



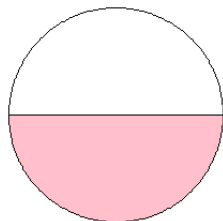
12.



# Fraction Models (D) Answers

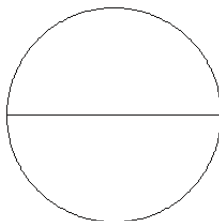
What fraction is shown in each model?

1.



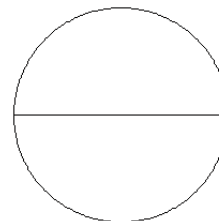
$$= \frac{1}{2}$$

2.



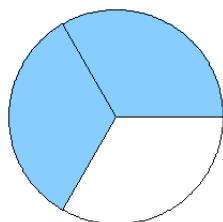
$$= \frac{0}{2}$$

3.




$$= \frac{0}{2}$$

4.



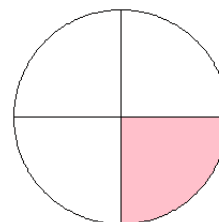
$$= \frac{2}{3}$$

5.



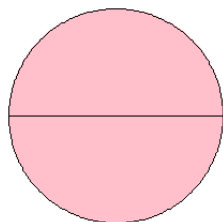
$$= \frac{2}{2}$$

6.



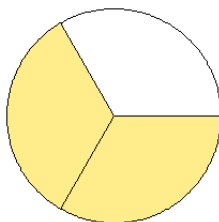
$$= \frac{1}{4}$$

7.




$$= \frac{2}{2}$$

8.



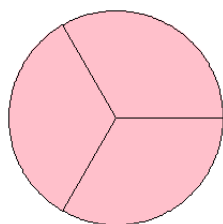
$$= \frac{2}{3}$$

9.



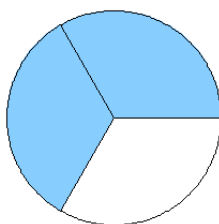
$$= \frac{2}{2}$$

10.



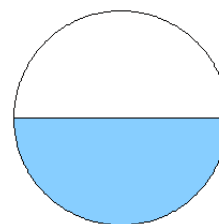
$$= \frac{3}{3}$$

11.



$$= \frac{2}{3}$$

12.



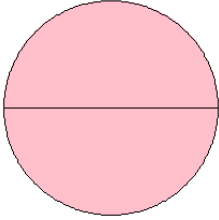
$$= \frac{1}{2}$$



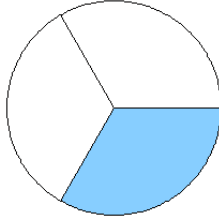
# Fraction Models (E)

What fraction is shown in each model?

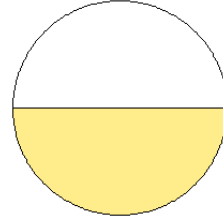
1.



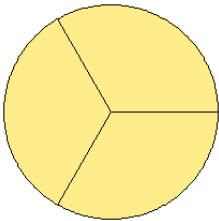
2.



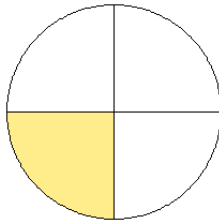
3.



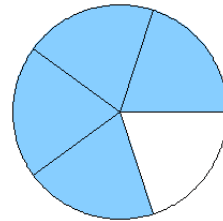
4.



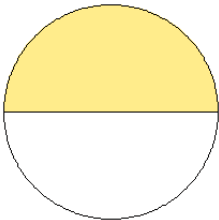
5.



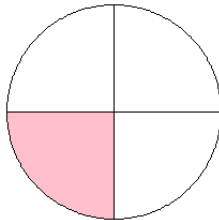
6.



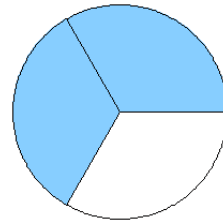
7.



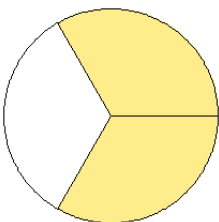
8.



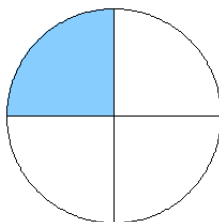
9.



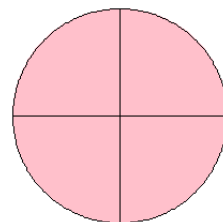
10.



11.



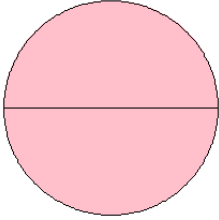
12.



# Fraction Models (E) Answers

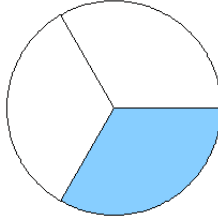
What fraction is shown in each model?

1.



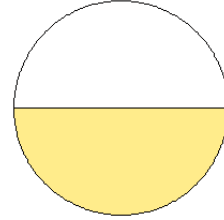
$$= \frac{2}{2}$$

2.



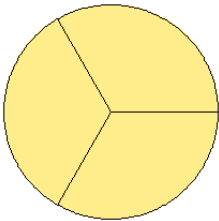
$$= \frac{1}{3}$$

3.



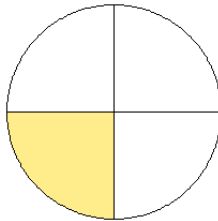
$$= \frac{1}{2}$$

4.



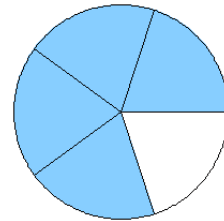
$$= \frac{3}{3}$$

5.



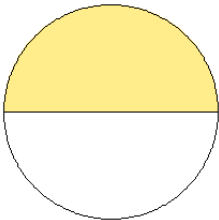
$$= \frac{1}{4}$$

6.



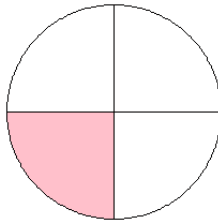
$$= \frac{4}{5}$$

7.



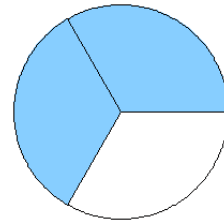
$$= \frac{1}{2}$$

8.



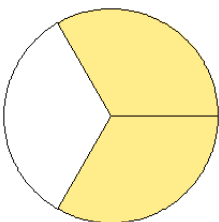
$$= \frac{1}{4}$$

9.



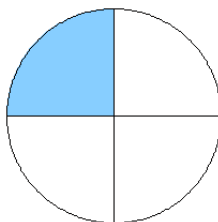
$$= \frac{2}{3}$$

10.



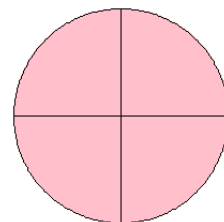
$$= \frac{2}{3}$$

11.



$$= \frac{1}{4}$$

12.

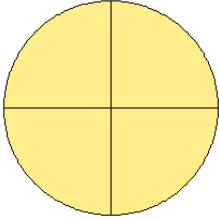


$$= \frac{4}{4}$$

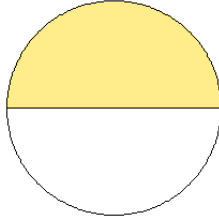
# Fraction Models (F)

What fraction is shown in each model?

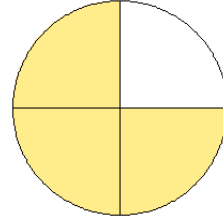
1.



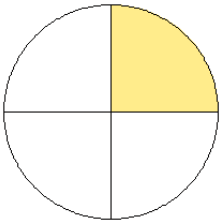
2.



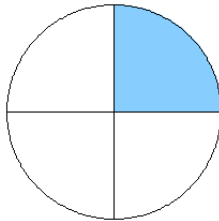
3.



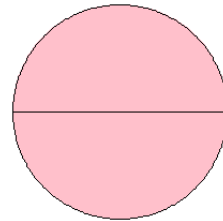
4.



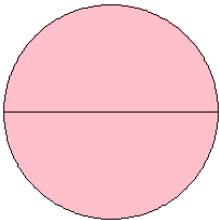
5.



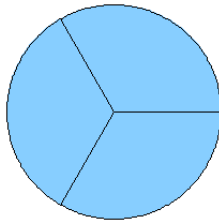
6.



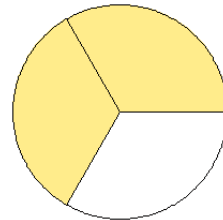
7.



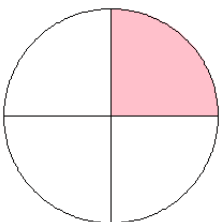
8.



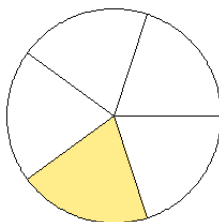
9.



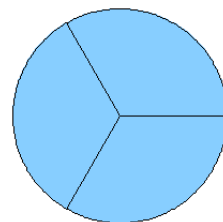
10.



11.



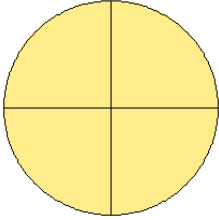
12.



# Fraction Models (F) Answers

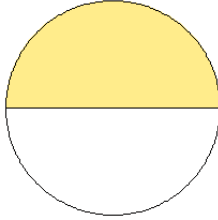
What fraction is shown in each model?

1.



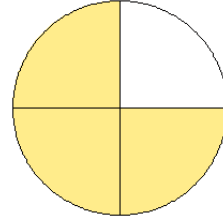
$$= \frac{4}{4}$$

2.



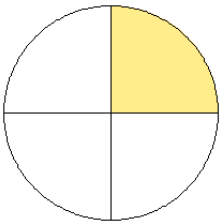
$$= \frac{1}{2}$$

3.



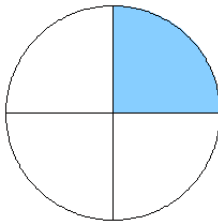
$$= \frac{3}{4}$$

4.



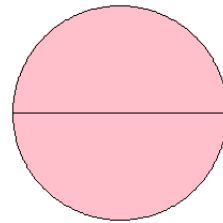
$$= \frac{1}{4}$$

5.



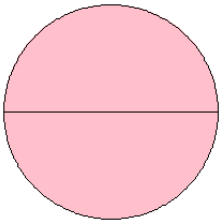
$$= \frac{1}{4}$$

6.



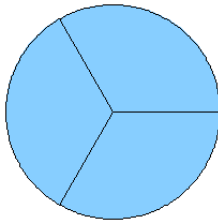
$$= \frac{2}{2}$$

7.



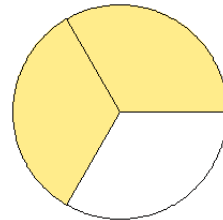
$$= \frac{2}{2}$$

8.



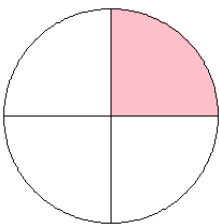
$$= \frac{3}{3}$$

9.



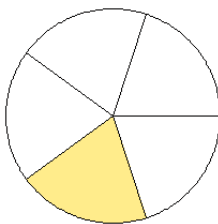
$$= \frac{2}{3}$$

10.



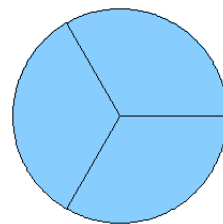
$$= \frac{1}{4}$$

11.



$$= \frac{1}{5}$$

12.

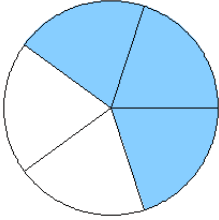


$$= \frac{3}{3}$$

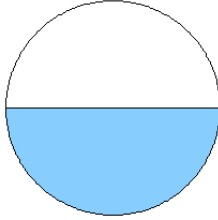
# Fraction Models (G)

What fraction is shown in each model?

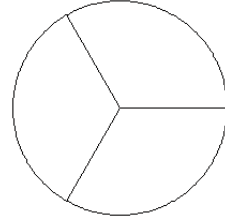
1.



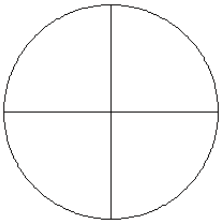
2.



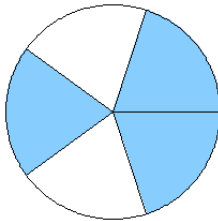
3.




4.



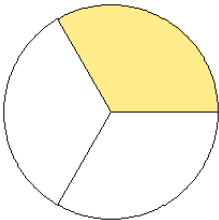
5.



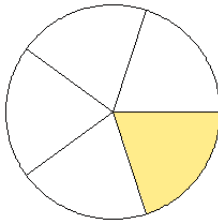
6.



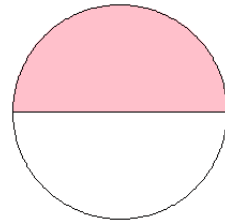
7.



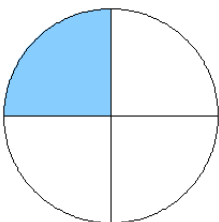
8.



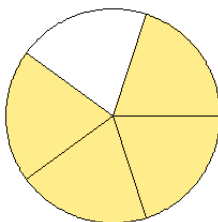
9.



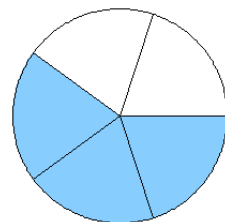
10.



11.



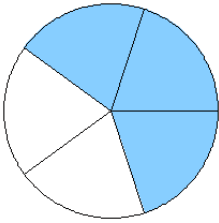
12.



# Fraction Models (G) Answers

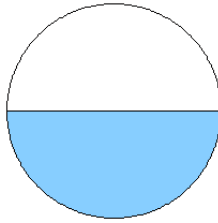
What fraction is shown in each model?

1.



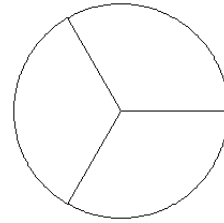
$$= \frac{3}{5}$$

2.



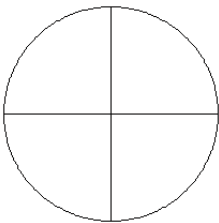
$$= \frac{1}{2}$$

3.



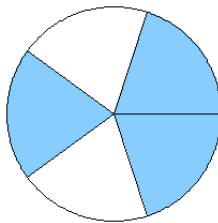
$$= \frac{0}{3}$$

4.




$$= \frac{0}{4}$$

5.



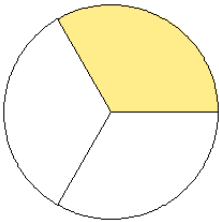
$$= \frac{3}{5}$$

6.



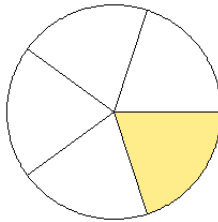
$$= \frac{2}{2}$$

7.



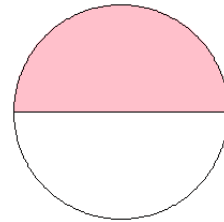
$$= \frac{1}{3}$$

8.



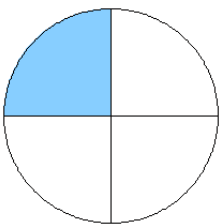
$$= \frac{1}{5}$$

9.



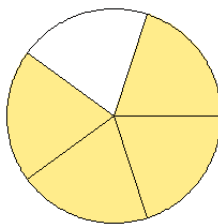
$$= \frac{1}{2}$$

10.



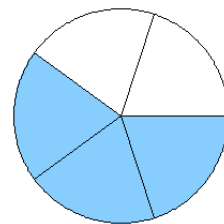
$$= \frac{1}{4}$$

11.



$$= \frac{4}{5}$$

12.

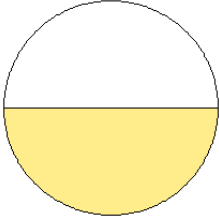


$$= \frac{3}{5}$$

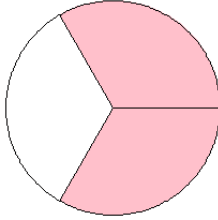
# Fraction Models (H)

What fraction is shown in each model?

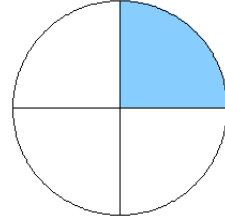
1.



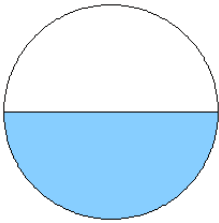
2.



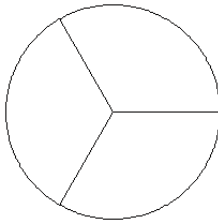
3.



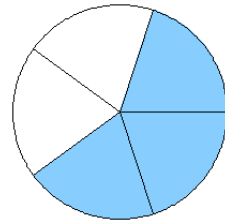
4.



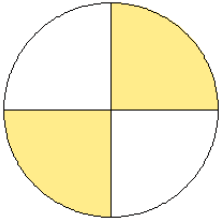
5.



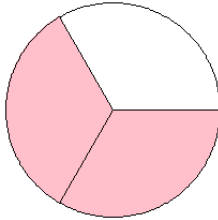
6.



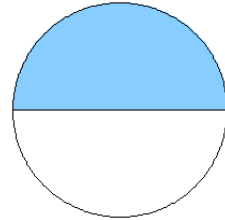
7.



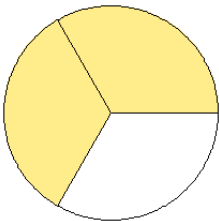
8.



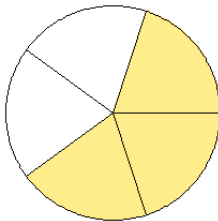
9.



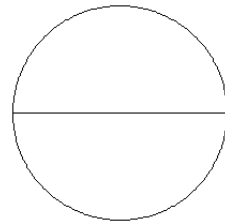
10.



11.



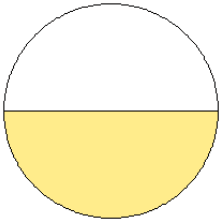
12.



# Fraction Models (H) Answers

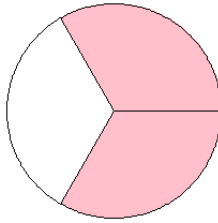
What fraction is shown in each model?

1.



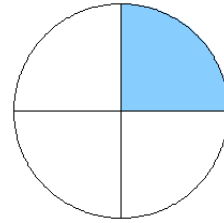
$$= \frac{1}{2}$$

2.



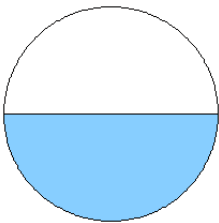
$$= \frac{2}{3}$$

3.



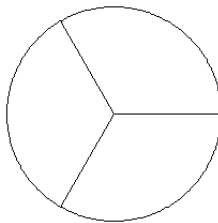
$$= \frac{1}{4}$$

4.



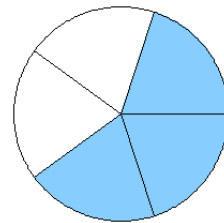
$$= \frac{1}{2}$$

5.



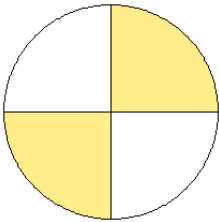
$$= \frac{0}{3}$$

6.



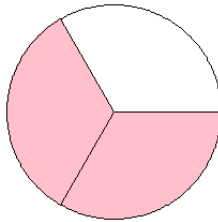
$$= \frac{3}{5}$$

7.



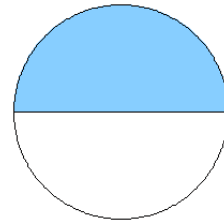
$$= \frac{2}{4}$$

8.



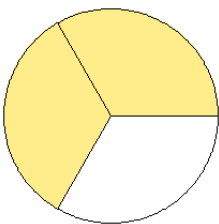
$$= \frac{2}{3}$$

9.



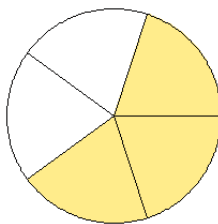
$$= \frac{1}{2}$$

10.



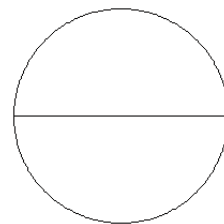
$$= \frac{2}{3}$$

11.



$$= \frac{3}{5}$$

12.



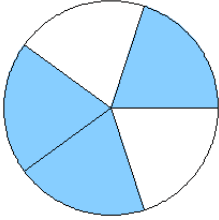
$$= \frac{0}{2}$$



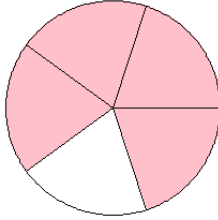
# Fraction Models (I)

What fraction is shown in each model?

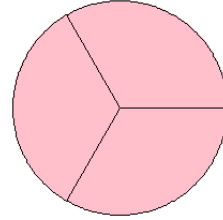
1.



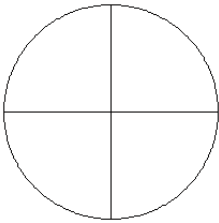
2.



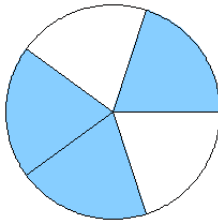
3.



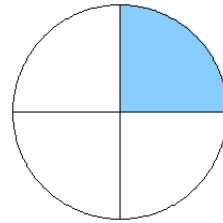
4.



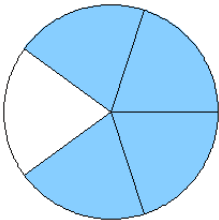
5.



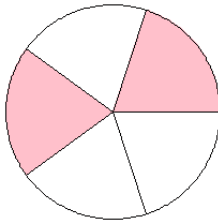
6.



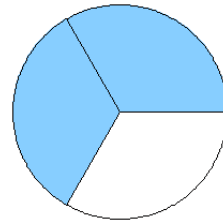
7.



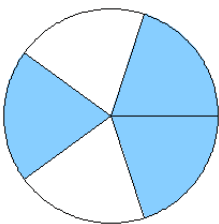
8.



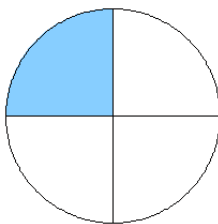
9.



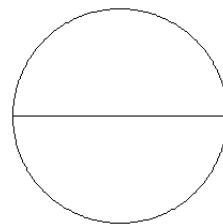
10.



11.



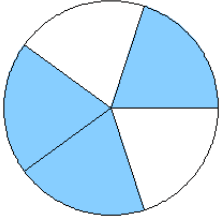
12.



# Fraction Models (I) Answers

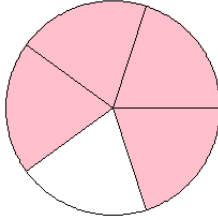
What fraction is shown in each model?

1.



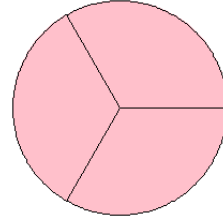
$$= \frac{3}{5}$$

2.



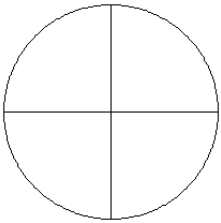
$$= \frac{4}{5}$$

3.



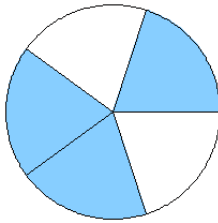
$$= \frac{3}{3}$$

4.



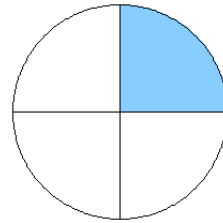
$$= \frac{0}{4}$$

5.



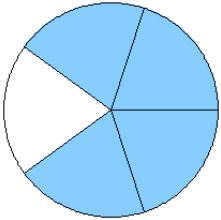
$$= \frac{3}{5}$$

6.



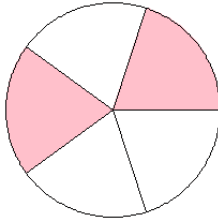
$$= \frac{1}{4}$$

7.



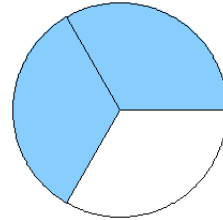
$$= \frac{4}{5}$$

8.



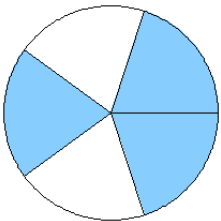
$$= \frac{2}{5}$$

9.



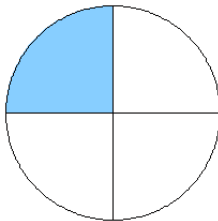
$$= \frac{2}{3}$$

10.



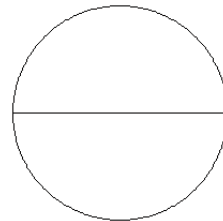
$$= \frac{3}{5}$$

11.



$$= \frac{1}{4}$$

12.

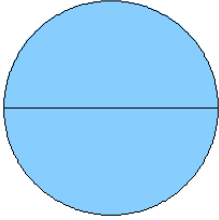


$$= \frac{0}{2}$$

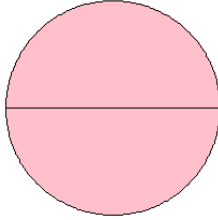
# Fraction Models (J)

What fraction is shown in each model?

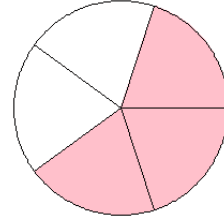
1.



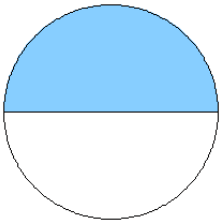
2.



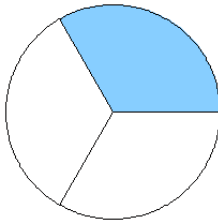
3.



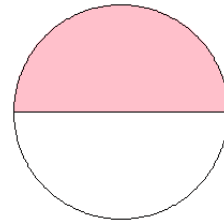
4.



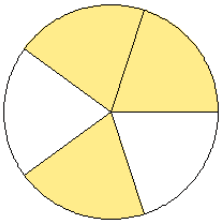
5.



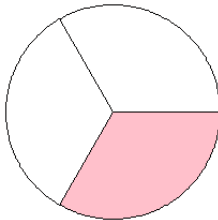
6.



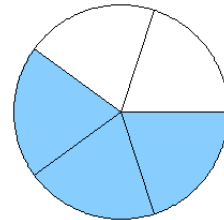
7.



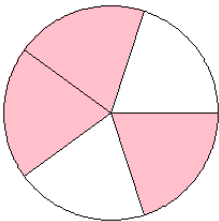
8.



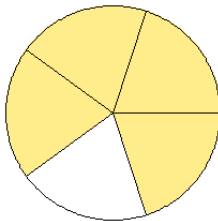
9.



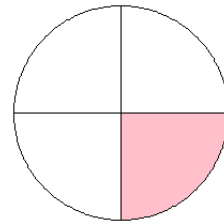
10.



11.



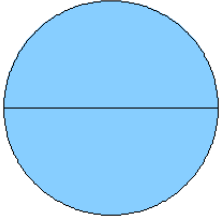
12.



# Fraction Models (J) Answers

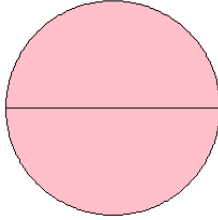
What fraction is shown in each model?

1.



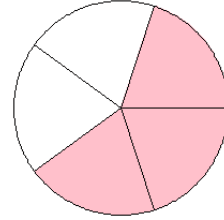
$$= \frac{2}{2}$$

2.



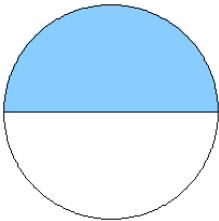
$$= \frac{2}{2}$$

3.



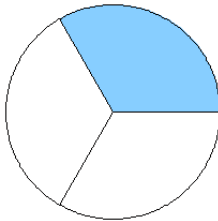
$$= \frac{3}{5}$$

4.



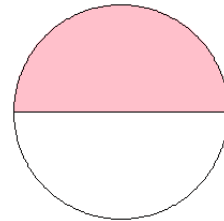
$$= \frac{1}{2}$$

5.



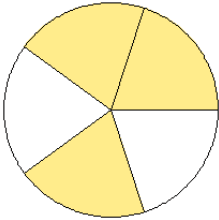
$$= \frac{1}{3}$$

6.



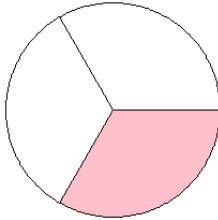
$$= \frac{1}{2}$$

7.



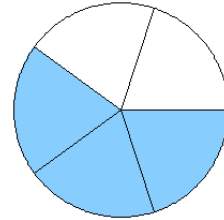
$$= \frac{3}{5}$$

8.



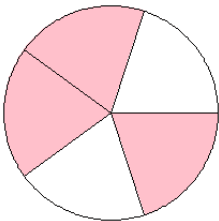
$$= \frac{1}{3}$$

9.



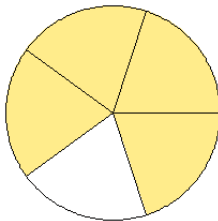
$$= \frac{3}{5}$$

10.



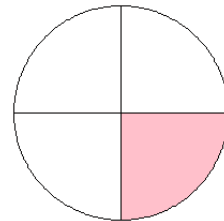
$$= \frac{3}{5}$$

11.



$$= \frac{4}{5}$$

12.



$$= \frac{1}{4}$$