



















Toy Store Math

You are the owner of the biggest toy store in your town. You had a huge toy sale over the weekend and need to determine your total sales on nine different best selling toys. Use the information in each box to determine the total sales for each of the nine different toys.

<p>1.  sold 14 airplanes</p> <p>Airplanes cost \$29.95 each.</p> <p>Total sales = \$_____</p>	<p>2.  sold 17 dolls</p> <p>Dolls cost \$11.59 each.</p> <p>Total sales = \$_____</p>	<p>3.  sold 9 trains</p> <p>Trains cost \$10.50 each.</p> <p>Total sales = \$_____</p>
<p>4.  sold 4 rocking horses</p> <p>Rocking horses cost \$49.00 each.</p> <p>Total sales = \$_____</p>	<p>5.  sold 15 pull toys</p> <p>Pull toys cost \$5.75 each.</p> <p>Total sales = \$_____</p>	<p>6.  sold 9 xylophones</p> <p>Xylophones cost \$9.22 each.</p> <p>Total sales = \$_____</p>
<p>7.  sold 18 baseballs</p> <p>Baseballs cost \$3.75 each.</p> <p>Total sales = \$_____</p>	<p>8.  sold 7 wooden horses</p> <p>Wooden horses cost \$6.19 each.</p> <p>Total sales = \$_____</p>	<p>9.  sold 13 wagons</p> <p>Wagons cost \$19.98 each.</p> <p>Total sales = \$_____</p>

Bonus: What was the total combined sales for all nine toys? \$_____

Toy Store Math answer key

<p>1.  sold 14 airplanes</p> <p>Airplanes cost \$29.95 each.</p> <p>Total sales = <u>\$419.30</u></p> <p>$\\$29.95 \times 14 = \underline{\\$419.30}$</p>	<p>2.  sold 17 dolls</p> <p>Dolls cost \$11.59 each.</p> <p>Total sales = <u>\$197.03</u></p> <p>$\\$11.59 \times 17 = \underline{\\$197.03}$</p>	<p>3.  sold 9 trains</p> <p>Trains cost \$10.50 each.</p> <p>Total sales = <u>\$94.50</u></p> <p>$\\$10.50 \times 9 = \underline{\\$94.50}$</p>
<p>4.  sold 4 rocking horses</p> <p>Rocking horses cost \$49.00 each.</p> <p>Total sales = <u>\$196.00</u></p> <p>$\\$49.00 \times 4 = \underline{\\$196.00}$</p>	<p>5.  sold 15 pull toys</p> <p>Pull toys cost \$5.75 each.</p> <p>Total sales = <u>\$86.25</u></p> <p>$\\$5.75 \times 15 = \underline{\\$86.25}$</p>	<p>6.  sold 9 xylophones</p> <p>Xylophones cost \$9.22 each.</p> <p>Total sales = <u>\$82.98</u></p> <p>$\\$9.22 \times 9 = \underline{\\$82.98}$</p>
<p>7.  sold 18 baseballs</p> <p>Baseballs cost \$3.75 each.</p> <p>Total sales = <u>\$67.50</u></p> <p>$\\$3.75 \times 18 = \underline{\\$67.50}$</p>	<p>8.  sold 7 wooden horses</p> <p>Wooden horses cost \$6.19 each.</p> <p>Total sales = <u>\$43.33</u></p> <p>$\\$6.19 \times 7 = \underline{\\$43.33}$</p>	<p>9.  sold 13 wagons</p> <p>Wagons cost \$19.98 each.</p> <p>Total sales = <u>\$259.74</u></p> <p>$\\$19.98 \times 13 = \underline{\\$259.74}$</p>

Bonus: What was the combined total sales for all nine toys? \$1,446.63

$$\$419.30 + \$197.03 + \$94.50 + \$196.00 + \$86.25 + \$82.98 + \$67.50 + \$43.33 + \$259.74 = \underline{\$1,446.63}$$